




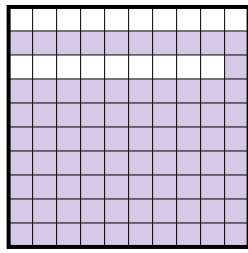
Determine the value written as a fraction, decimal & a percent.

Ex)



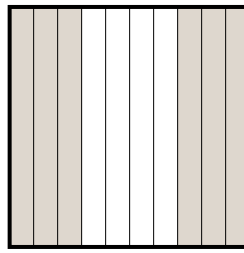
fraction $\frac{9}{10}$
decimal 0.9
percent 90%

1)



fraction _____
decimal _____
percent _____

2)



fraction _____
decimal _____
percent _____

Answers

Ex. $\frac{9}{10}$ 0.9 90%

1. _____

2. _____

3. _____

4. _____

5. _____

6. _____

7. _____

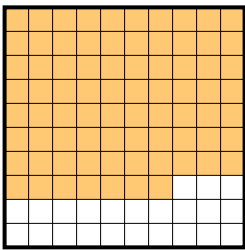
8. _____

9. _____

10. _____


11. _____

3)




fraction _____
decimal _____
percent _____

4)



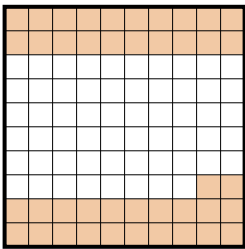
fraction _____
decimal _____
percent _____

5)



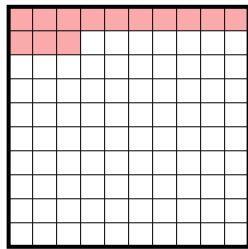
fraction _____
decimal _____
percent _____

6)



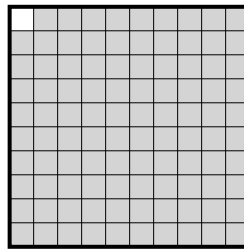
fraction _____
decimal _____
percent _____

7)




fraction _____
decimal _____
percent _____

8)



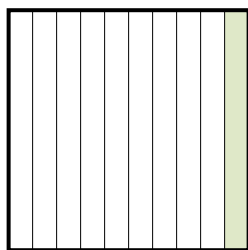
fraction _____
decimal _____
percent _____

9)



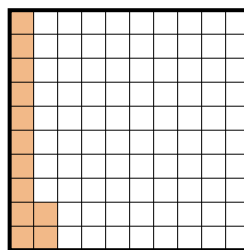
fraction _____
decimal _____
percent _____

10)



fraction _____
decimal _____
percent _____

11)



fraction _____
decimal _____
percent _____

